


European Flags

Match up the flag with the country. Write the names under the flags.



1. France

a. Paris




2. Spain

b. Madrid



3. Germany

c. Berlin



4. Norway

d. Oslo



5. Finland

e. Helsinki



6. Sweden

f. Stocholm




7. Russia

g. Moscow



8. Hungary

h. Budapest



9. Switzerland

i. Bern

European Flags

Match up the flag with the country. Write the names under the flags.



1. Estonia

a. Tallin



2. Romania

b. Bucharest



3. Austria

c. Vienna



4. Belgium

d. Brussels




5. Netherlands

e. Amsterdam



6. Slovenia

f. Ljubljana



7. Bulgaria

g. Sofia



8. Italy

h. Rome



9. Lithuania

i. Vilnius


European Flags

Match up the flag with the country. Write the names under the flags.



1. Albania

a. Tirana




2. Czech Republic

b. Prague



3. Republic of Ireland

c. Dublin



4. England

d. London



5. Slovakia

e. Bratislava



6. Wales

f. Cardiff



7. Latvia

g. Riga



8. Croatia

h. Zagreb



9. Scotland

i. Edinburgh

European Flags

Match up the flag with the country. Write the names under the flags.



1. Poland

a. Warsaw



2. Greece

b. Athens



3. Malta

c. Valletta



4. Ukraine

d. Kiev



5. Portugal

e. Lisbon



6. Iceland

f. Reykjavik



7. Denmark

g. Copenhagen



8. Cyprus

h. Nikosia



9. Luxembourg

i. Luxembourg City

Answers

European Flags Sheet 1:	European Flags Sheet 2:	European Flags Sheet 3:	European Flags Sheet 4:
1. France	1. Estonia	1. Albania	1. Poland
2. Spain	2. Romania	2. Czech Republic	2. Greece
3. Germany	3. Austria	3. Republic of Ireland	3. Malta
4. Norway	4. Belgium	4. England	4. Ukraine
5. Finland	5. Netherlands	5. Slovakia	5. Portugal
6. Sweden	6. Slovenia	6. Wales	6. Iceland
7. Russia	7. Bulgaria	7. Latvia	7. Denmark
8. Hungary	8. Italy	8. Croatia	8. Cyprus
9. Switzerland	9. Lithuania	9. Scotland	9. Luxembourg

Extension Task:

European Flags Sheet 1:	European Flags Sheet 2:	European Flags Sheet 3:	European Flags Sheet 4:
a. Paris	a. Tallin	a. Tirana	a. Warsaw
b. Madrid	b. Bucharest	b. Prague	b. Athens
c. Berlin	c. Vienna	c. Dublin	c. Valletta
d. Oslo	d. Brussels	d. London	d. Kiev
e. Helsinki	e. Amsterdam	e. Bratislava	e. Lisbon
f. Stockholm	f. Ljubljana	f. Cardiff	f. Reykjavik
g. Moscow	g. Sofia	g. Riga	g. Copenhagen
h. Budapest	h. Rome	h. Zagreb	h. Nicosia
i. Bern	i. Vilnius	i. Edinburgh	i. Luxembourg City